

Time: 10 Minutes

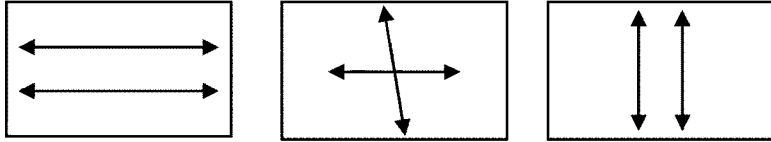
Paper Math 4

Total Marks: 10

6th Month, 1st Week, 1st Day Syllabus: Unit 6: Exercise – 1 Q # 1

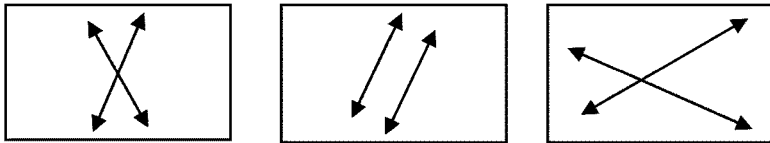
Q.No.1. Identify parallel – lines from the, following: (5)

سوال نمبر 1: درج ذیل میں سے متوازی خطوط کی پہچان کریں:



Q.No.2. Identify Non-parallel lines from the, following: (5)

سوال نمبر 2: غیر متوازی خطوط کی پہچان کریں:



Time: 10 Minutes

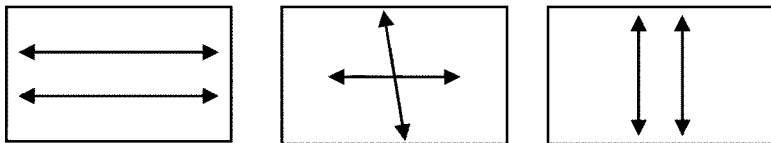
Paper Math 4

Total Marks: 10

6th Month, 1st Week, 1st Day Syllabus: Unit 6: Exercise – 1 Q # 1

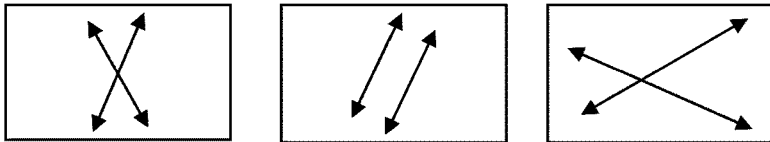
Q.No.1. Identify parallel – lines from the, following: (5)

سوال نمبر 1: درج ذیل میں سے متوازی خطوط کی پہچان کریں:



Q.No.2. Identify Non-parallel lines from the, following: (5)

سوال نمبر 2: غیر متوازی خطوط کی پہچان کریں:



Time: 10 Minutes

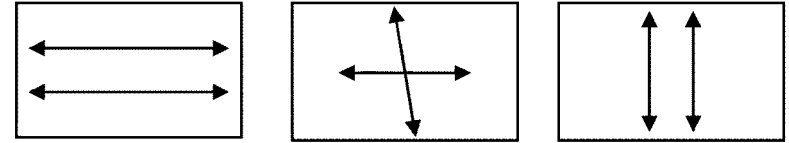
Paper Math 4

Total Marks: 10

6th Month, 1st Week, 1st Day Syllabus: Unit 6: Exercise – 1 Q # 1

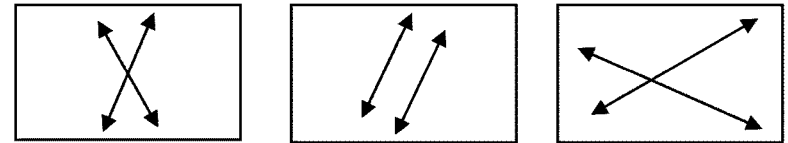
Q.No.1. Identify parallel – lines from the, following: (5)

سوال نمبر 1: درج ذیل میں سے متوازی خطوط کی پہچان کریں:



Q.No.2. Identify Non-parallel lines from the, following: (5)

سوال نمبر 2: غیر متوازی خطوط کی پہچان کریں:



Time: 10 Minutes

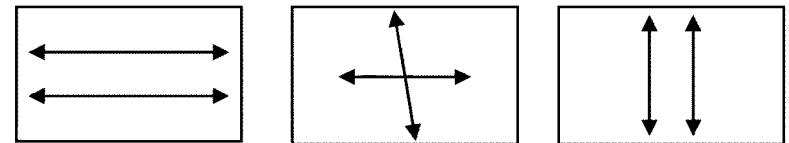
Paper Math 4

Total Marks: 10

6th Month, 1st Week, 1st Day Syllabus: Unit 6: Exercise – 1 Q # 1

Q.No.1. Identify parallel – lines from the, following: (5)

سوال نمبر 1: درج ذیل میں سے متوازی خطوط کی پہچان کریں:



Q.No.2. Identify Non-parallel lines from the, following: (5)

سوال نمبر 2: غیر متوازی خطوط کی پہچان کریں:

